

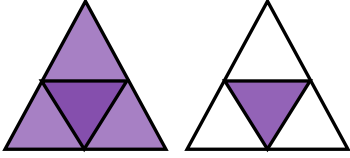


Adı Soyadı :

Numarası :

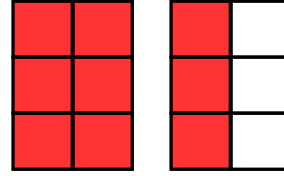
Konu: Bileşik Kesir Etkinliği 2

Şekillerin boyalı kısımlarının ifade ettiği bileşik kesirleri ve okunuşlarını örnekteki gibi yazalım.



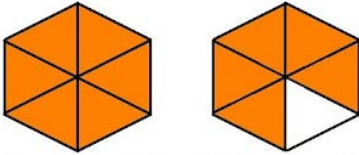
$\frac{5}{4}$

Dörtte beş **veya** beş bölü dört



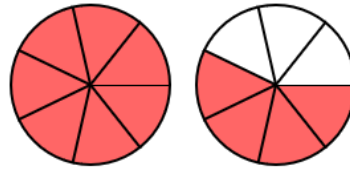
....
—
....

..... veya



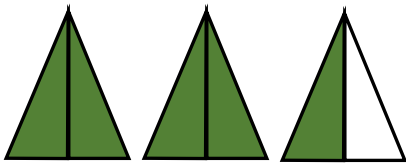
....
—
....

..... veya



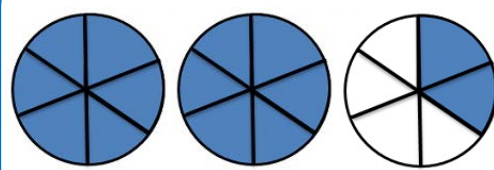
....
—
....

..... veya



....
—
....

..... veya



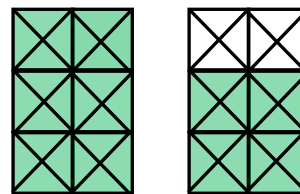
....
—
....

..... veya



....
—
....

..... veya

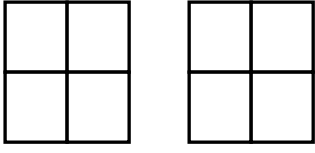


....
—
....


..... veya

Aşağıdaki kesir ifadelerine göre şekilleri boyayınız.

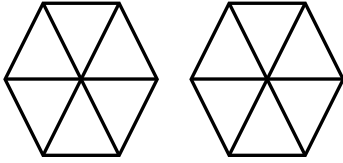
$$\frac{6}{4}$$



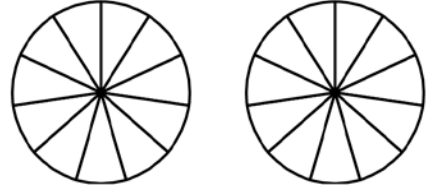
$$\frac{7}{4}$$



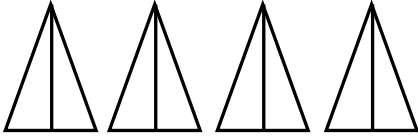
$$\frac{9}{6}$$



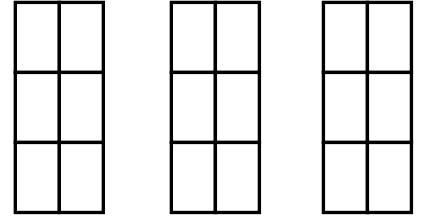
$$\frac{17}{11}$$



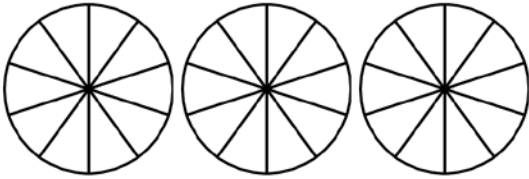
$$\frac{7}{2}$$



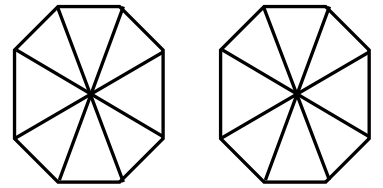
$$\frac{15}{6}$$



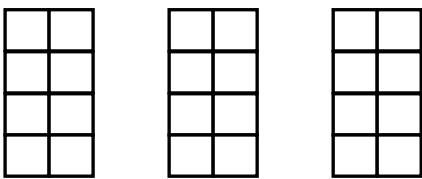
$$\frac{30}{12}$$



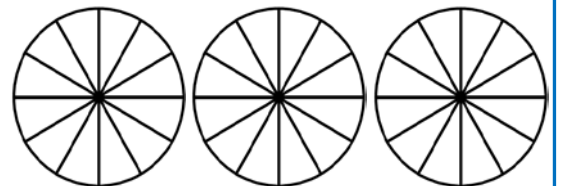
$$\frac{11}{8}$$



$$\frac{17}{8}$$



$$\frac{35}{12}$$



Aşağıda verilen kesirlerin örnekteki gibi okunuşunu yazarak modelle gösteriniz

$$\frac{8}{5} \rightarrow \text{Sekizde beş}$$

$$\frac{6}{3} \rightarrow \dots\dots\dots$$

$$\frac{10}{4} \rightarrow \dots\dots\dots$$

$$\frac{8}{6} \rightarrow \dots\dots\dots$$

$$\frac{12}{6} \rightarrow \dots\dots\dots$$

$$\frac{5}{8} \rightarrow \dots\dots\dots$$

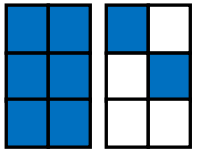
$$\frac{12}{7} \rightarrow \dots\dots\dots$$

$$\frac{13}{6} \rightarrow \dots\dots\dots$$

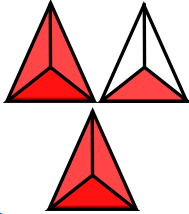
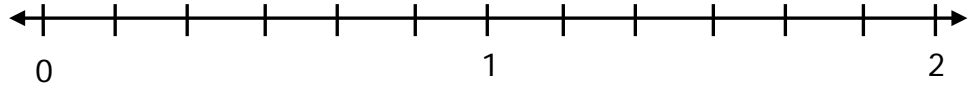
$$\frac{20}{8} \rightarrow \dots\dots\dots$$

$$\frac{15}{10} \rightarrow \dots\dots\dots$$

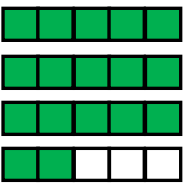
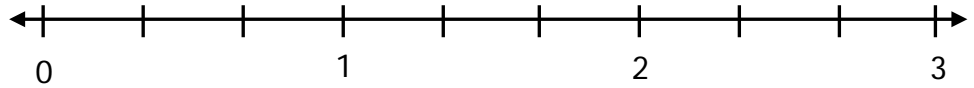
Aşağıda kesir modellerini kesir sayısı olarak yazarak sayı doğrusunda gösteriniz.



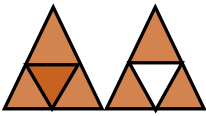
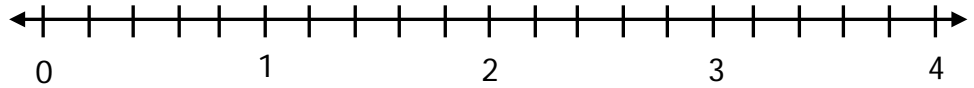
....
....



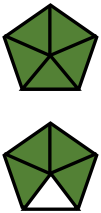
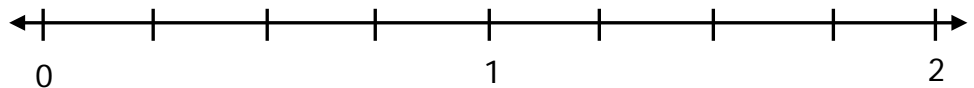
....
....



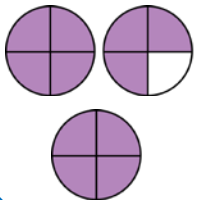
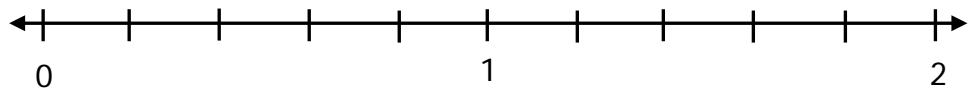
....
....



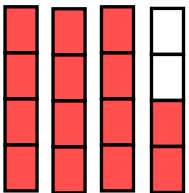
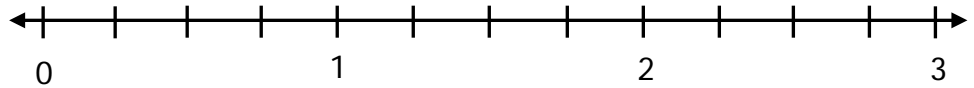
....
....



....
....



....
....



....
....

